

The Ambassadors College, Ota

PRE - GRADE 8

Third Term

Mid - Term Holiday Assignment

HOLIDAY ASSIGNMENT

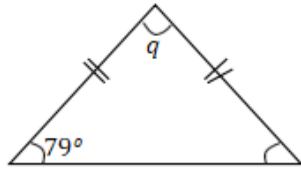
2025/2026 Academic Session

Name: _____

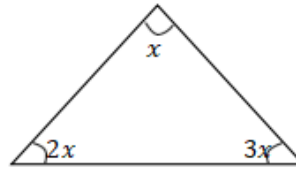
MATHEMATICS

A. Find the unknown angles in the following

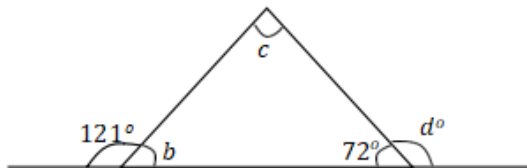
1.



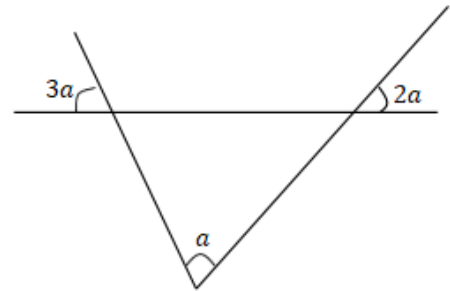
2.



3.



4.



B. Itemize 3 similarities and difference between the following pairs of

(i) Square and rectangle

(ii) Square and rhombus

(iii) Parallelogram and rhombus

ENGLISH LANGUAGE

Answer one question only from this section.

(The composition should contain at least 250 words).

Credit will be given for clarity of expression and orderly presentation of material.

1. With the consent of your parents, write a letter inviting your friend to spend part of the long vacation with you.

Mid – Term Holiday Assignment

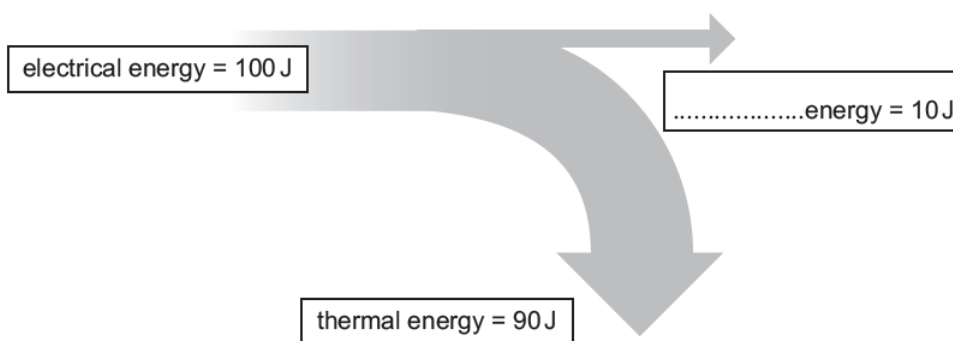
2. The quality of food prepared for students in your school has become very poor. Write a letter to the Principal complaining about this and explaining ways in which this situation can be remedied.
3. You are the chief speaker in a debate on the topic: “Education is not as important as riches.” Write your argument for or against the topic.
4. Write a story ending with the statement: “Indeed it was the biggest lesson of my life”

BASIC SCIENCE

1. Define the following terms: (i) Sound (ii) Echo (iii) Reverberation
2. Write **three (3)** applications of echoes.
- 3.

Diagrams are used to show how energy is transferred.

Lamps transfer energy.



Complete the diagram to show the type of energy that is 10 J.

[1]